















# Compare groups of objects



1 Tick (✓) the group with the **greatest** number of objects in each set.  
Use cubes to help you.

a	A 	
	B 	
b	A 	
	B 	
c	A 	
	B 	
d	A 	
	B 	
e	A 	
	B 	

2 Tick (✓) the group with the **greatest** number of objects.  
Cross (X) the group with the **fewest** number of objects.

A		
B		
C		
D		

# Compare groups of objects



1 Complete the sentences by using **less than**, **greater than** or **equal to**.

a

	is _____	
	is _____	
	is _____	

b

	is _____	
	is _____	
	is _____	

2 Dom has made a mistake below.  
Circle his mistake.

A		is <u>greater than</u>	
B		is <u>equal to</u>	
C		is <u>less than</u>	

Explain how you know.

---



---



---

# Compare groups of objects



1 Tick (✓) the group with the **greatest** number of objects.

a	A		<input type="checkbox"/>
	B		<input type="checkbox"/>
b	A		<input type="checkbox"/>
	B		<input type="checkbox"/>
c	A		<input type="checkbox"/>
	B		<input type="checkbox"/>

2 Tick (✓) the group with the **greatest** number of objects.  
Cross (X) the group with the **fewest** number of objects.

a	A		<input type="checkbox"/>
	B		<input type="checkbox"/>
	C		<input type="checkbox"/>
	D		<input type="checkbox"/>
b	A		<input type="checkbox"/>
	B		<input type="checkbox"/>
	C		<input type="checkbox"/>
	D		<input type="checkbox"/>

# Compare groups of objects



1 Complete the sentences by using **less than**, **greater than** or **equal to**.

	is _____	
	is _____	
	is _____	

2 Look at groups A, B and C below and answer the following questions.

<p>A</p>	<p>B</p>	<p>C</p>
----------	----------	----------

- a Which group shows the **most**? \_\_\_\_\_
- b Which group shows the **least**? \_\_\_\_\_
- c How many **more** in group A than C? \_\_\_\_\_
- d How many **fewer** in group C than B? \_\_\_\_\_


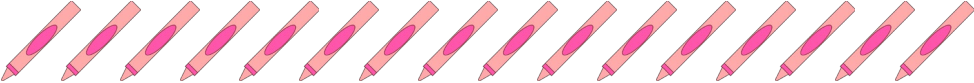


3 Draw pencils in the boxes to show correct comparisons.

Least	Most

# Compare groups of objects



- 1 Tick (✓) the group with the **greatest** number of objects.  
Cross (X) the group with the **fewest** number of objects.

A		
B		
C		
D		

- 2 Sue says,



Group A has a **greater** number of objects than group B.

A 

B 


What mistake has Sue made and why do you think this is?

---




---

- 3 How many pencils could go in the empty box?  
Draw pencils to show this.



Least

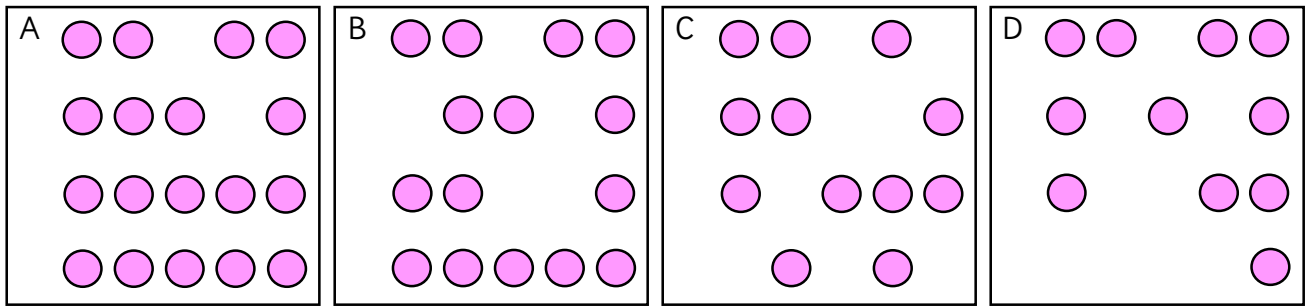


Most

# Compare groups of objects



1 Look at groups A, B, C and D below and answer the following questions.

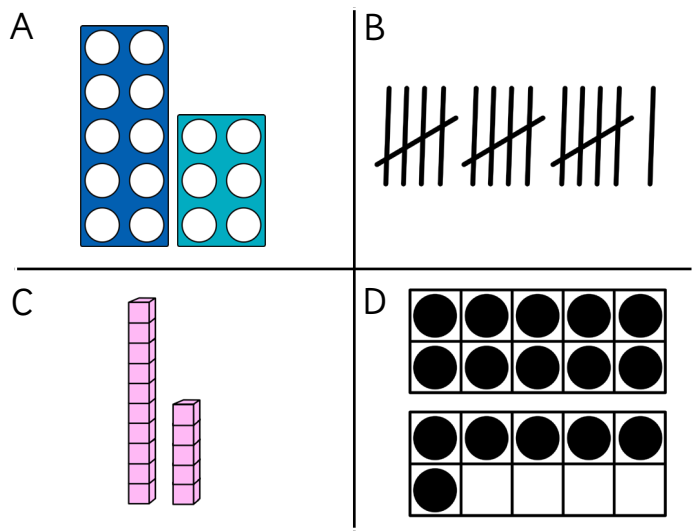


- a Which group shows the **most**? \_\_\_\_\_
- b Which group shows the **least**? \_\_\_\_\_
- c How many **more** in group A than C? \_\_\_\_\_
- d How many **fewer** in group C than B? \_\_\_\_\_
- e Use  $>$ ,  $<$  to complete the comparisons below.

A  D

C  B

2 Which image is the odd one out?



Explain your answer.

---



---



---



---



---